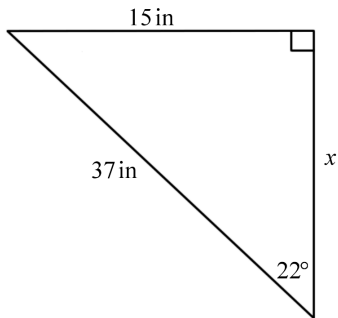
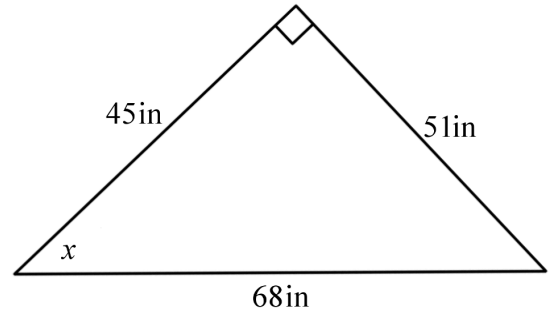


Solving using cosine is best.



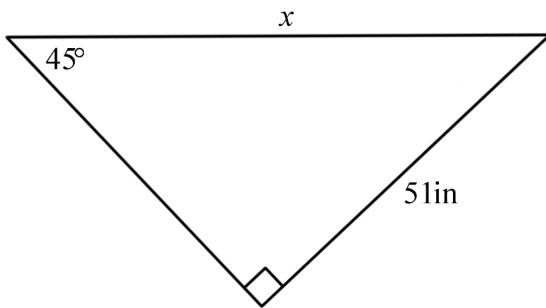
Solving using tangent is best.

Solving for  $x$  using cosine is best.



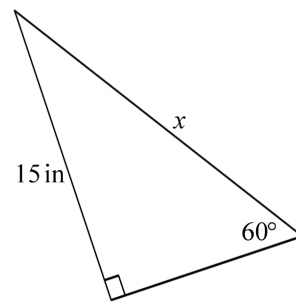
Solving for  $x$  using tangent is best.

Solving for  $x$  using sine is best.



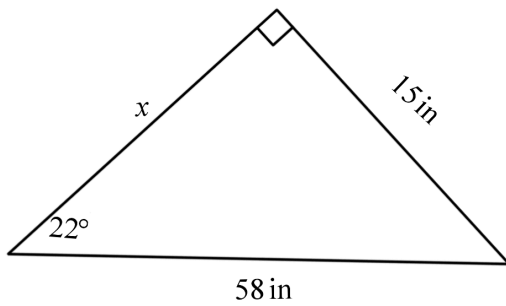
Using special right triangles is best.

Solving for  $x$  using sine is best.



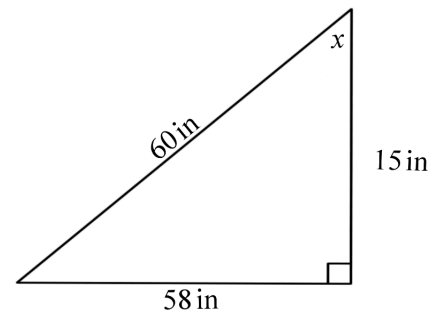
Solving for  $x$  using cosine is best.

Solving for  $x$  using cosine is best.



Solving for  $x$  using sine is best.

Solving for  $x$  using sine is best.



Solving for  $x$  using cosine is best.